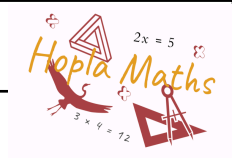
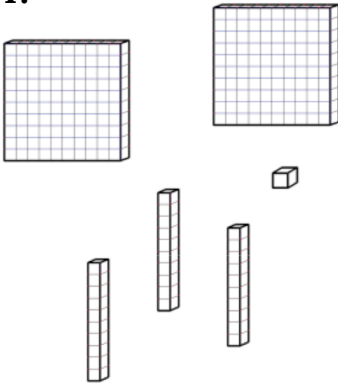


Activité numération de position



1ère partie :

1.



Combien de dizaines de cubes ?

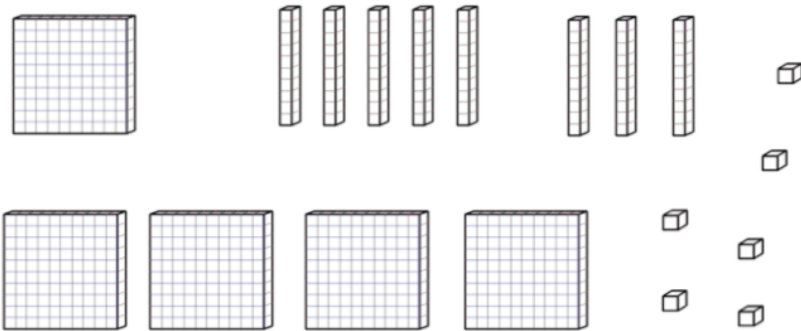
.....

.....

.....

.....

2.



Combien de centaines de cubes ?

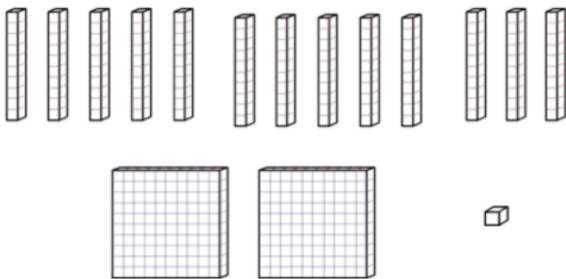
.....

.....

.....

.....

3.



Combien de centaines de cubes ?

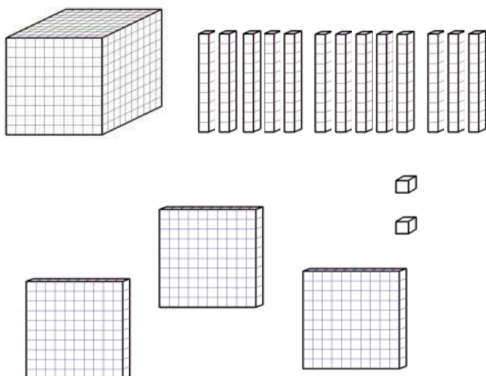
.....

.....

.....

.....

4.



Combien de centaines de cubes ?

.....

.....

.....

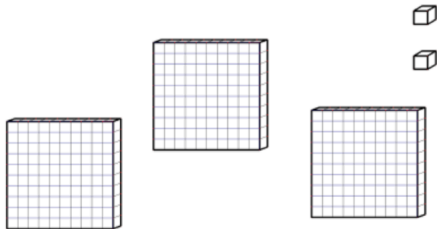
.....

5.



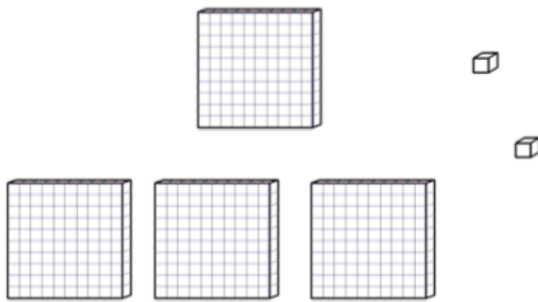
Combien de dizaines de cubes ?

.....



2ème Partie :

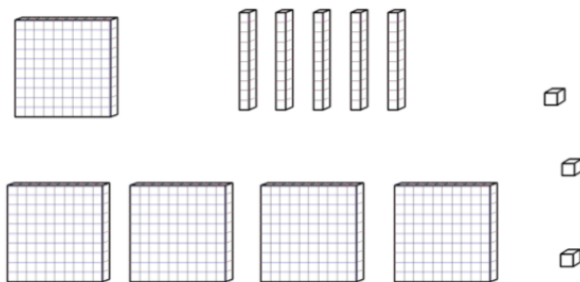
1.



J'en ai 402 en tout. Qu'est-ce que je compte ?

.....

2.



J'en ai 5 en tout. Qu'est-ce que je compte ?

.....

